

Activity Sheet 5

Number Shape Challenge

Each shape stands for a number.

















The numbers shown are the totals of the line of four numbers in the row or column.

Example: The total of the third row (circle + circle + star + star) is 22.

The total of the first column (circle + star + circle + triangle) is 20

The total of the last column (4 stars) is 28

Now, can you find the missing totals?

				
				
				22
				
20			28	

What numbers do each shape stand for?

Spelling Challenge

Find at least 4 words that have the same meaning as the word below. Use a thesaurus to help you. You can even try an online thesaurus.



1. _____
2. _____
3. _____
4. _____

Nagħmlu s-sehem tagħna

Sfortunatament mhux kulhadd iħobb u jirrispetta l-animali li nsibu madwarna.

Ohloq 'poster' biex kulhadd jirrispetta u jħobb l-animali.

