

Name : _____

Score : _____








Teacher : _____


Date : _____

Interpreting Pictographs

DVD Parlor tracked the number of DVD's sold over seven months. Answer the questions based on the pictograph below.

DVD's Sold

June	
July	
August	
September	
October	
November	
December	

 = 20 DVD's

- 1) Were more DVD's sold during the months prior to September or in the months following September? Or were an equal amount of DVD's sold in each set of months? _____
- 2) How many DVD's did DVD Parlor sell in both August & September? _____
- 3) Which two consecutive months had the greatest number of DVD's sold? If multiple consecutive months tied, write them all. _____
- 4) Did DVD Parlor sell more DVD's during the months of July & August or in the months of June & July? Or were there equal numbers of DVD's sold? _____
- 5) What was the mean, or average number of DVD's sold per month? Round your answer to the nearest hundredth if necessary. _____
- 6) Which two consecutive months had the fewest number of DVD's sold? If multiple consecutive months tied, write them all. _____
- 7) How many DVD's were sold at the store in both October & November? _____

Name : _____

Score : _____

Teacher : _____

Date : _____

Interpreting Pictographs

DVD Parlor tracked the number of DVD's sold over seven months. Answer the questions based on the pictograph below.



- 1) Were more DVD's sold during the months prior to September or in the months following September? Or were an equal amount of DVD's sold in each set of months? After September
- 2) How many DVD's did DVD Parlor sell in both August & September? 240
- 3) Which two consecutive months had the greatest number of DVD's sold? If multiple consecutive months tied, write them all. September, October
- 4) Did DVD Parlor sell more DVD's during the months of July & August or in the months of June & July? Or were there equal numbers of DVD's sold? June & July
- 5) What was the mean, or average number of DVD's sold per month? Round your answer to the nearest hundredth if necessary. 102.86
- 6) Which two consecutive months had the fewest number of DVD's sold? If multiple consecutive months tied, write them all. October, November
- 7) How many DVD's were sold at the store in both October & November? 140