

Work out these two pages on your Maths Booklet
Pages 15 and 16.

Name _____

5 minutes

Write the matching times.



⌋ : ⌋



⌋ : ⌋



⌋ : ⌋



⌋ : ⌋



⌋ : ⌋



⌋ : ⌋



⌋ : ⌋



⌋ : ⌋



⌋ : ⌋



⌋ : ⌋



⌋ : ⌋



⌋ : ⌋

ame _____


5 minutes

~~Write and~~ draw the matching times.


1. 3 : 20



2. 5 : 40




3. 7 : 05



4. 1 : 35




5. 6 : 10




6. 2 : 50



7. 9 : 25



8. 4 : 55



9. 8 : 45

